

Name: _____

Class: _____

ANGLES

Classify and measure the angles.

1.



2.



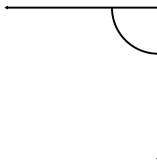
3.



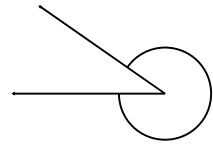
4.



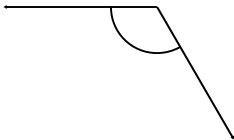
5.



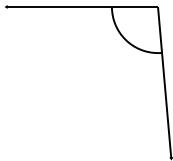
6.



7.



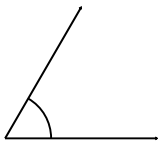
8.



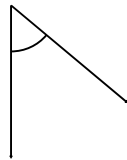
9.



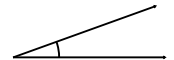
10.



11.



12.



Name: _____

Class: _____

ANGLES

Classify and measure the angles.

1.



155° Obtuse

2.



150° Obtuse

3.



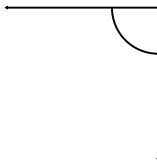
5° Acute

4.



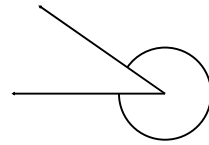
190° Reflex

5.



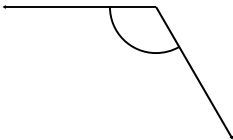
90° Right

6.



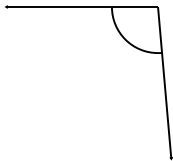
325° Reflex

7.



120° Obtuse

8.



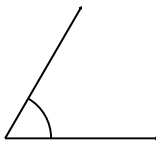
95° Obtuse

9.



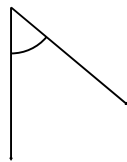
25° Acute

10.



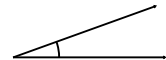
60° Acute

11.



50° Acute

12.



20° Acute